



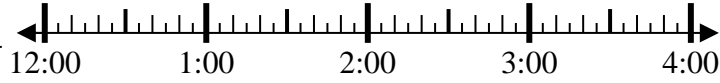
Solve each problem.

Answers

1) Start: 12:15

Elapsed: _____

End: 1:50

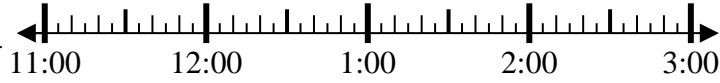


1. _____

2) Start: 11:30

Elapsed: _____

End: 12:55

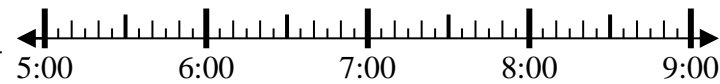


2. _____

3) Start: 5:10

Elapsed: _____

End: 6:45

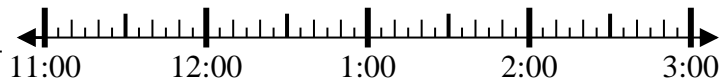


3. _____

4) Start: 11:00

Elapsed: _____

End: 12:10



4. _____

5) Start: 12:30

Elapsed: _____

End: 1:40

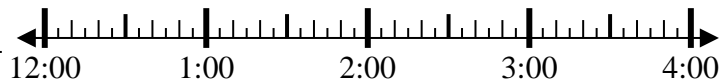


5. _____

6) Start: 12:40

Elapsed: _____

End: 2:05

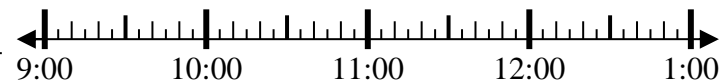


6. _____

7) Start: 9:40

Elapsed: _____

End: 11:30

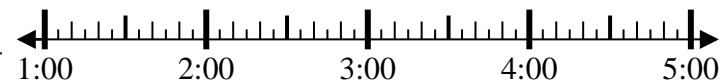


7. _____

8) Start: 1:35

Elapsed: _____

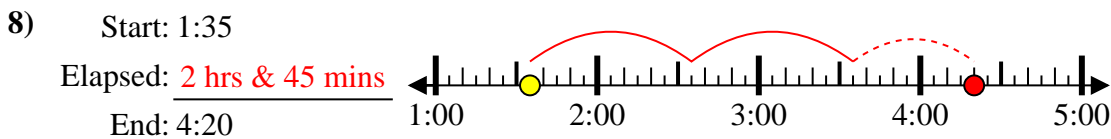
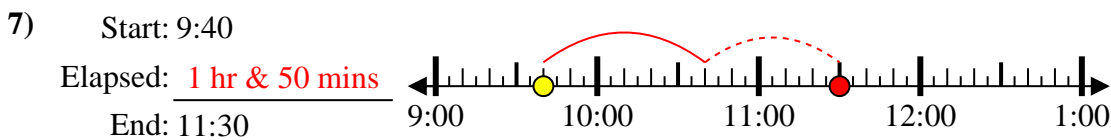
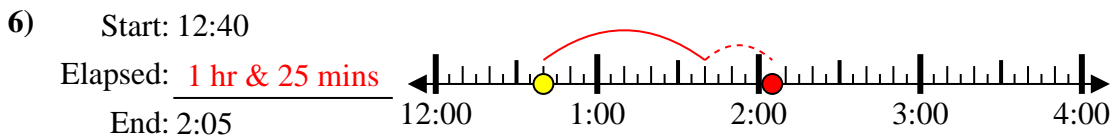
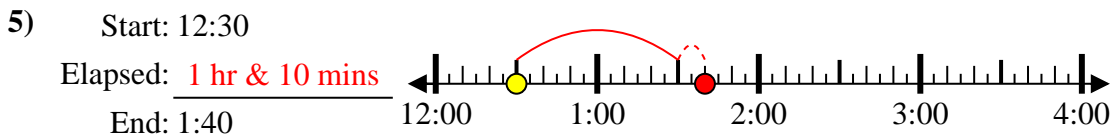
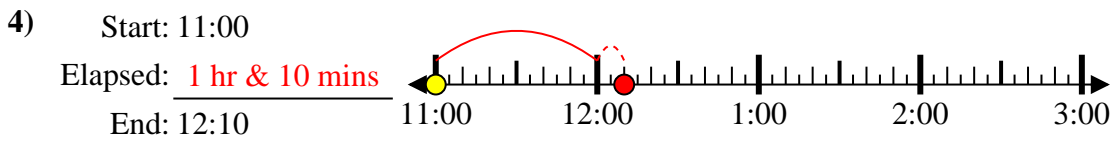
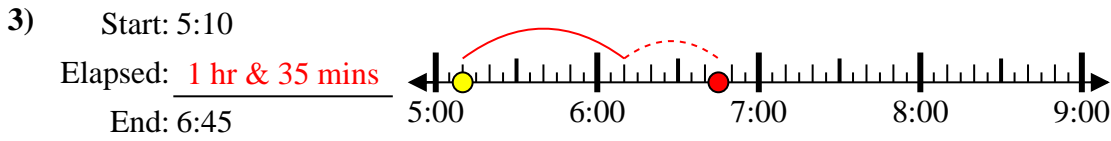
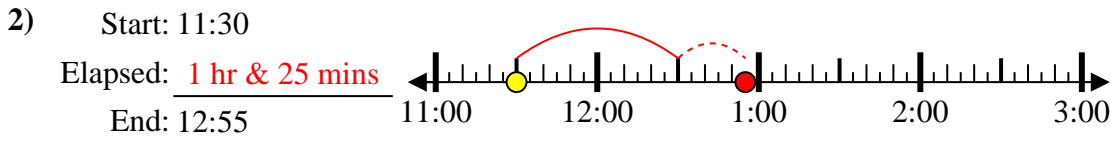
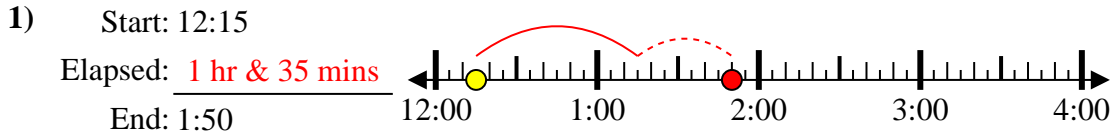
End: 4:20



8. _____



Solve each problem.



Answers

1. 1 hr & 35 mins

2. 1 hr & 25 mins

3. 1 hr & 35 mins

4. 1 hr & 10 mins

5. 1 hr & 10 mins

6. 1 hr & 25 mins

7. 1 hr & 50 mins

8. 2 hrs & 45 mins